

1. The table shows the menu at a café.

Menu					
Main Items		Drinks		Snacks	
Roll	£3.60	Tea	£1.20	Packet of crisps	£1
Sandwich	£3.49	Coffee	£1.85	Piece of fruit	60p
Salad	£4.23	Soft drink	95p	Cereal bar	86p

- (a) Lucy buys a cereal bar, a coffee, a salad and a piece of fruit.

Write down the prices for these items in order of cost.
Start with the cheapest.

[2]

60p 86p £1.85 £4.23

Cheapest

- (b) The café offers a Meal Deal.

Buy any main item with a drink and snack for £5.

Jason buys a sandwich. Later he buys a tea and a packet of crisps.

How much **less** would he have paid if he had bought these three items using the Meal Deal?

[2]

$$3.49 + 1.2 + 1 = 5.69$$

£0.69

- (c) (i) On Monday, Emma buys 8 soft drinks.
What is the total cost for this?

[2]

$$95 \times 8 = \underline{\underline{760p}}$$

- (ii) On Tuesday, Emma only buys coffees.
She spends £12.95.
How many coffees does she buy?


[2]

$$12.95 \div 1.85 = \underline{\underline{7}}$$



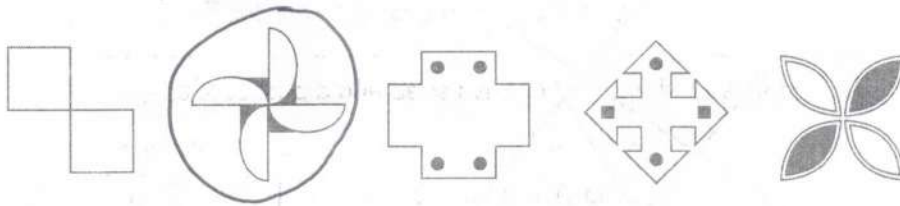
2. (a) Complete the pattern below so that AB is a line of symmetry.
Shade the smallest possible number of squares.

[2]

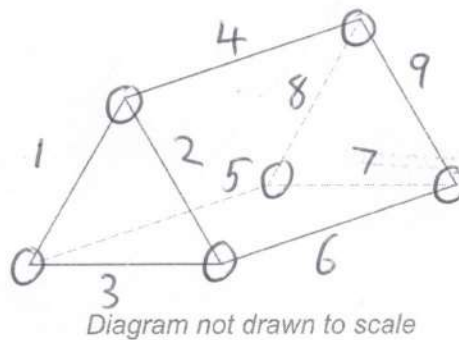


- (b) Circle the shape below that has rotational symmetry of order 4.

[1]



- (c) The diagram below shows a triangular prism.



How many edges and vertices does the triangular prism have?

[2]

Edges 9 Vertices 6



- (d) Draw one line to connect each of the following mathematical names to the correct shape.
You will not need to use every shape. One has been completed for you.

[2]

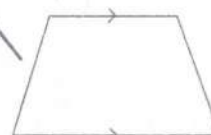
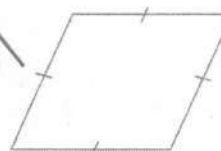
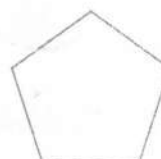

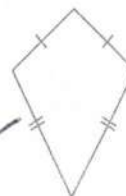
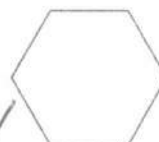
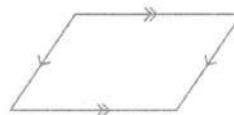
Rectangle

Rhombus

Trapezium

Kite

Hexagon



05

3. (a) Peter uses numbers and a symbol to correctly write,
one seventh is greater than one eighth.

Circle what Peter writes.

[1]

$$\frac{1}{7} \leq \frac{1}{8}$$

$$\frac{1}{7} > \frac{1}{8}$$

$$\frac{1}{7} = \frac{1}{8}$$

$$\frac{1}{7} > \frac{1}{8}$$

$$\frac{1}{7} < \frac{1}{8}$$

- (b) A large jar contains 8571 jellybeans.
2857 of the jellybeans in the jar are blue.



[1]

Use one of the five options shown below to complete the sentence.

One fifth

One quarter

One third

One half

Two thirds

one third

of the jellybeans in the jar are blue.

$$\frac{2857}{8571} = \frac{1}{3}$$

- (c) Three of the factors of 18 have a sum of 17.
Write these three factors in the boxes below.

[3]

6 3
9 2
18 1

9

















6

2



4. Rhys owns a bakery.
He recorded how many cupcakes he sold each day.
The results for the first four days are displayed in the pictogram below.

Key:  represents 12 cupcakes

Monday	  	36
Tuesday	 	21
Wednesday	   	48
Thursday	  	30
Friday	   	42

- (a) Rhys sold 42 cupcakes on Friday.

(i) Complete the pictogram for Friday. ✓

[1]

(ii) How many cupcakes did Rhys sell in total from Monday to Friday?

[2]

177

cupcakes sold in total from Monday to Friday.

- (b) On Saturday, Rhys sold 17 cupcakes.

Explain why the key used for the pictogram is not suitable to show this.

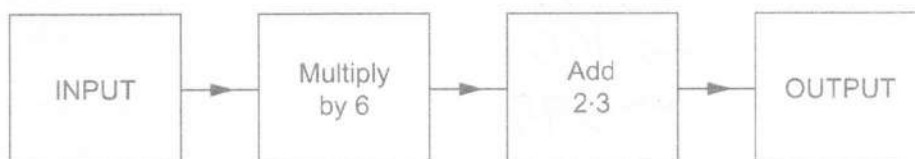
[1]

    = 3, 6, 9, 12

5 cannot be shown
(easily)



5. (a) The diagram below shows a number machine.



- (i) When the INPUT is 8, what is the OUTPUT? [1]

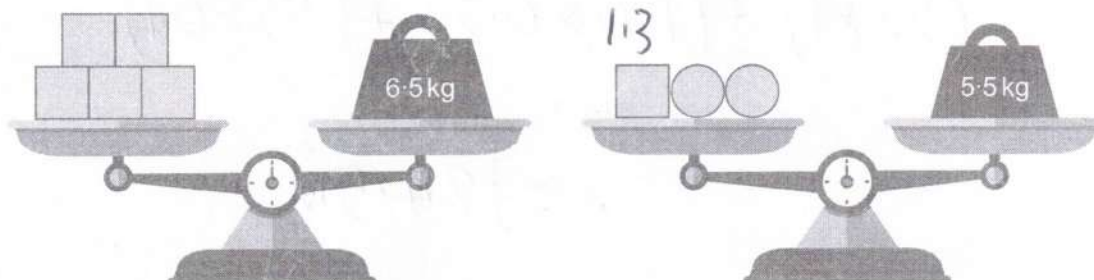
50.3

- (ii) When the OUTPUT is 34.7, what was the INPUT? [1]

- 2.3, ÷ 6 5.4

- (b) The diagram shows some boxes and some balls on balance scales.

All the boxes have the same mass.
All the balls have the same mass.



Calculate the mass of each box and the mass of each ball. [3]

$$\square = \frac{6.5}{5} \quad \text{O} = \frac{5.5 - 1.3}{2}$$

Mass of each box 1.3 kg Mass of each ball 2.1 kg



6. Philip has 250 coins in his money box.

- 22% are £1 coins. $\rightarrow 55$
- $\frac{2}{5}$ are 20p coins. $\rightarrow 100$
- The rest are 10p coins. $\rightarrow 95$



(a) How many £1 coins are there in Philip's money box?

[2]

$$250 \times \frac{22}{100} = \underline{\underline{55}}$$

(b) How many 20p coins are there in Philip's money box?

[2]

$$\frac{2}{5} \times 250 = \underline{\underline{100}}$$

(c) What is the total value of the coins in Philip's money box?

[4]

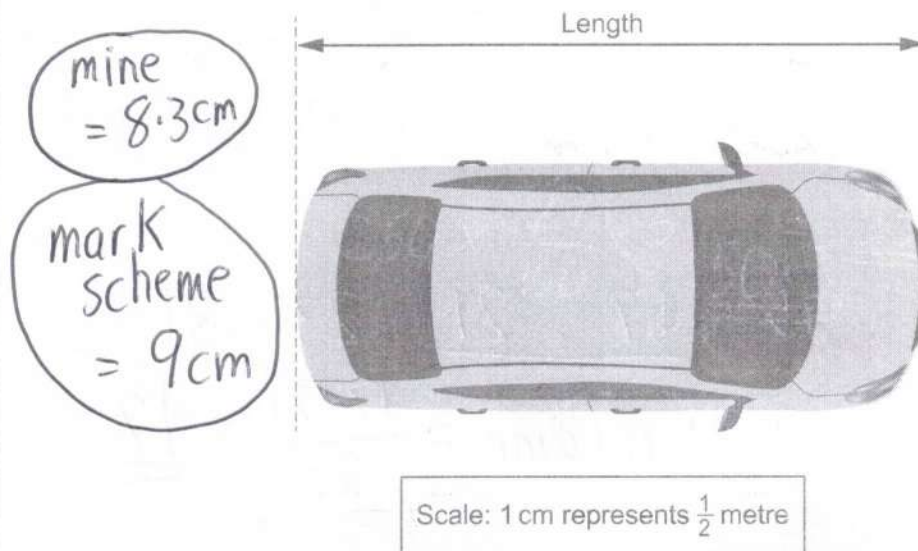
$$(55 \times 1) + (100 \times 0.2) + (95 \times 0.1)$$

$$= \underline{\underline{£84.50}}$$



7. Reem has made a scale model of her car.

The diagram below shows the plan view of her model.



- (a) Find the length of Reem's actual car.

[3]

$$9 \times \frac{1}{2} = 4.5\text{m}$$

- (b) The height of Reem's actual car is 1.7 m.

Calculate the height of the model car.
Give your answer in cm.

[2]

$$1.7 \div \frac{1}{2} = 3.4\text{cm}$$



8. Shazad has six numbered cards.

17	31	13	23	15	21
----	----	----	----	----	----

- (a) What is the median of the numbers on Shazad's cards?

[2]

$$13 \quad 15 \quad \underline{17 \quad 21} \quad 23 \quad 31$$

$$\text{median} = \frac{17+21}{2} = 19$$

- (b) Liz says,

"I can pick five of Shazad's cards that have a mean of 21."

Which five cards must Liz pick for her statement to be correct?
You must show all your working.

[3]

$$\text{Total} = 21 \times 5 = 105$$

13	17	21	23	31
----	----	----	----	----



9. The diagram shows three **identical** squares.

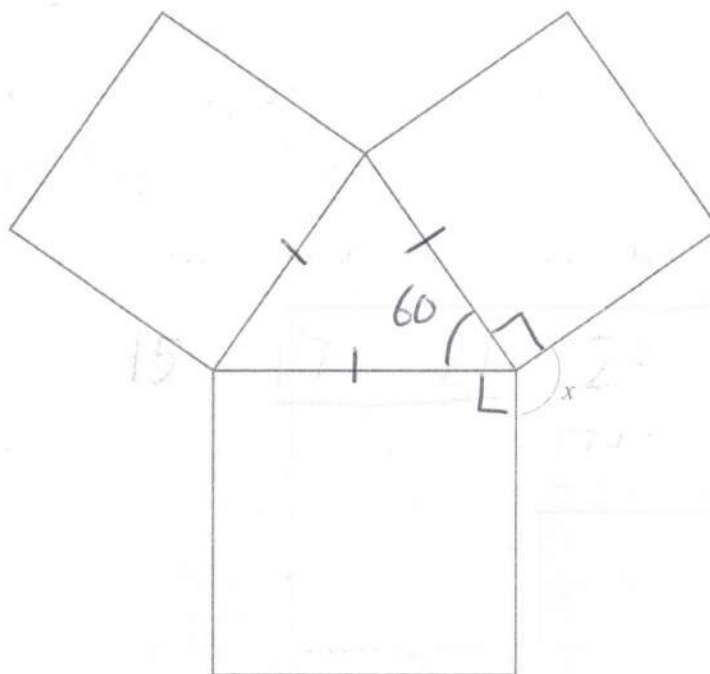


Diagram not drawn to scale

Calculate the size of angle x .

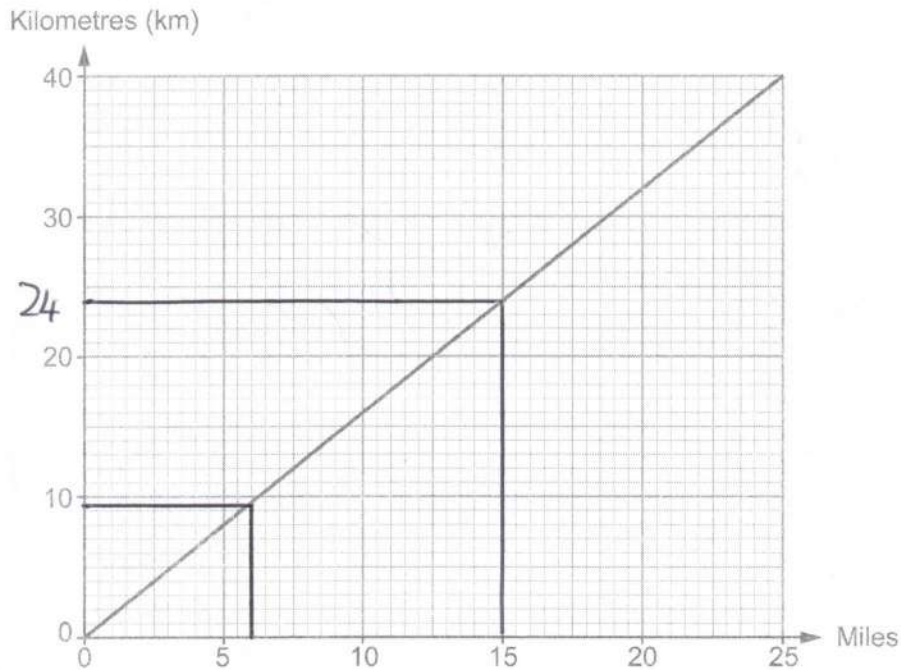
[3]

$$x = 360 - 60 - 90 - 90$$

$$x = 120^\circ$$



10. The conversion graph below may be used to change between distances in miles and distances in kilometres.



Use the graph to answer the following questions.

- (a) Aaron and Jenny both went for a run.
Aaron ran 28 km and Jenny ran 15 miles. $= 24 \text{ km}$

Who ran the longer distance?

Aaron



Jenny



Show how you decide.

[1]

- (b) Complete the following statement.
You must show all your working.

[2]

$\times 6 \rightarrow$ 36 miles is equal to 57 km.

6 miles = 9.5 km

9.5×6

[ms 54-58]



11. (a) Simplify $4(x+6)+3x$.

[2]

$$4x + 24 + 3x = 7x + 24$$

- (b) Solve $\frac{f}{3} = 5 \cdot 1$.

[1]

$$f = 5 \cdot 1 \times 3 = 15 \cdot 3$$

- (c) $x = \frac{w(y+2)}{8}$

Find the value of x when $w = 3$ and $y = 24$.

[2]

$$x = \frac{3(24+2)}{8} = \frac{3(26)}{8} = \frac{78}{8}$$

$$= 9.75$$

12. (a) Calculate $\sqrt{5 \times 3 \cdot 8} + 2 \cdot 1^2$.

Give your answer correct to 2 decimal places.

[2]

$$8.7688... = 8.77$$

- (b) Write 0.05834 correct to 1 significant figure.

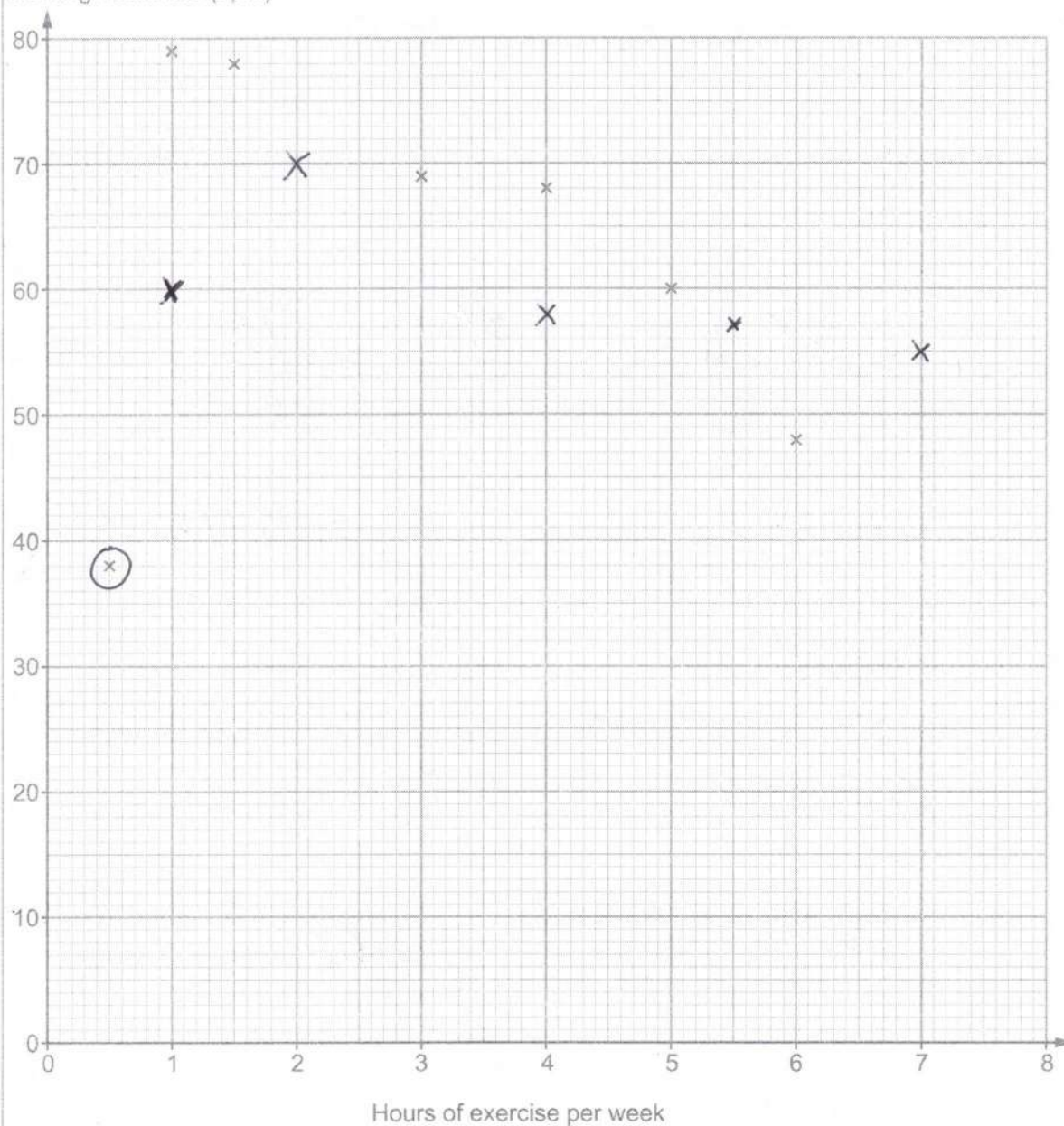
[1]

$$0.06$$



13. Ken measured the resting heart rate, in beats per minute (bpm), of twelve people. He asked them how many hours of exercise they usually completed each week. The results for seven of the people have been plotted on the scatter diagram.

Resting heart rate (bpm)



- (a) Here are the results for the remaining five people.

Hours of exercise per week	2	4	1	7	5.5
Resting heart rate (bpm)	70	58	60	55	57

Plot these results on the scatter diagram. ✓

[2]

- (b) Ken recorded one person's resting heart rate incorrectly.

Circle the point on the scatter diagram that this is most likely to be. ✓

[1]

- (c) Describe the relationship between hours of exercise per week and resting heart rate of the people Ken asked.

Ignore the result that was recorded incorrectly.

[1]

negative correlation / the more hrs of exercise
the lower the resting heart rate



14. (a) Geomet High School has 740 students.

Each student was asked which method of travel listed below was their main method of travel to school.

The table below shows the methods of travel together with some of their probabilities.

Method of travel	Walk	Bus	Bike	Car	Train	Other
Probability	0.2	0.35	0.3	$2x$	x	0

- (i) A student is chosen at random.

What is the probability that this student walks to school or travels to school by bus?

[1]

$$0.2 + 0.35 = \underline{\underline{0.55}}$$

- (ii) How many of the 740 students travel to school by bus?

[2]

$$740 \times 0.35 = \underline{\underline{259}}$$

- (iii) The probability that a student travels to school by car is **twice** the probability that a student travels to school by train.

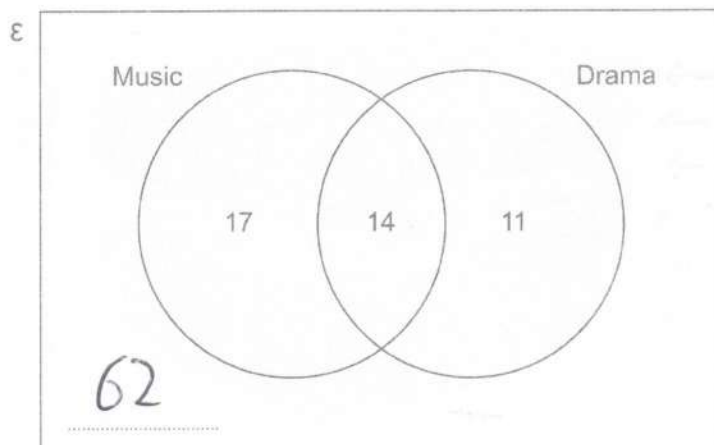
Calculate the probability that a student travels to school by train.

[3]

$$\begin{aligned} 3x + 0.85 &= 1 \\ 3x &= 0.15 \\ x &= 0.05 \end{aligned} \quad \text{Train} = 0.05$$



- (b) The Venn diagram shows information about the number of students who study Music and Drama in Year 11 at Geomet High School.



There are 104 students in Year 11.

- (i) Complete the Venn diagram to show the number of students in Year 11 who do **not** study Music or Drama. [1]

$$104 - 17 - 14 - 11 = 62$$

- (ii) What is the probability that a student chosen at random from Year 11 studies Music? [2]

$$\frac{31}{104}$$



15. A shop sells storage boxes.
A stack of four of these boxes is shown below.




Diagram not drawn to scale

The height of a single box is 35.2 cm.
The height of four of the same boxes when stacked is 52 cm.

A different stack of these boxes has a height of 85.6 cm.
How many boxes are in this stack?

[5]

$$3x + 35.2 = 52$$

$$3x = 16.8$$

$$x = 5.6$$

$$85.6 - 35.2 = 50.4$$

$$\frac{50.4}{5.6} = 9$$

so 10



16. Make g the subject of the formula.

[2]

$$h = k + 2g$$

$$h - k = 2g$$

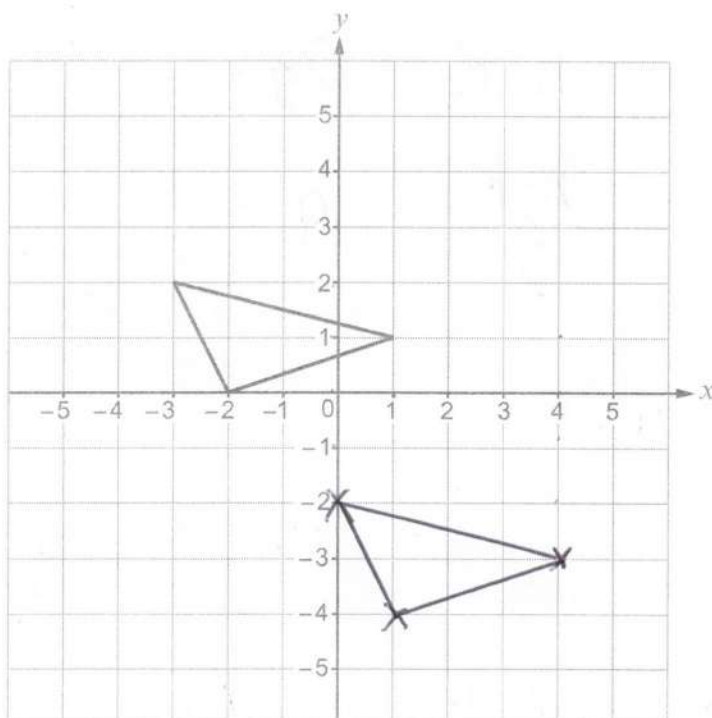
$$\frac{h - k}{2} = g$$



17. (a) Translate this triangle using the vector $\begin{pmatrix} 3 \\ -4 \end{pmatrix}$.

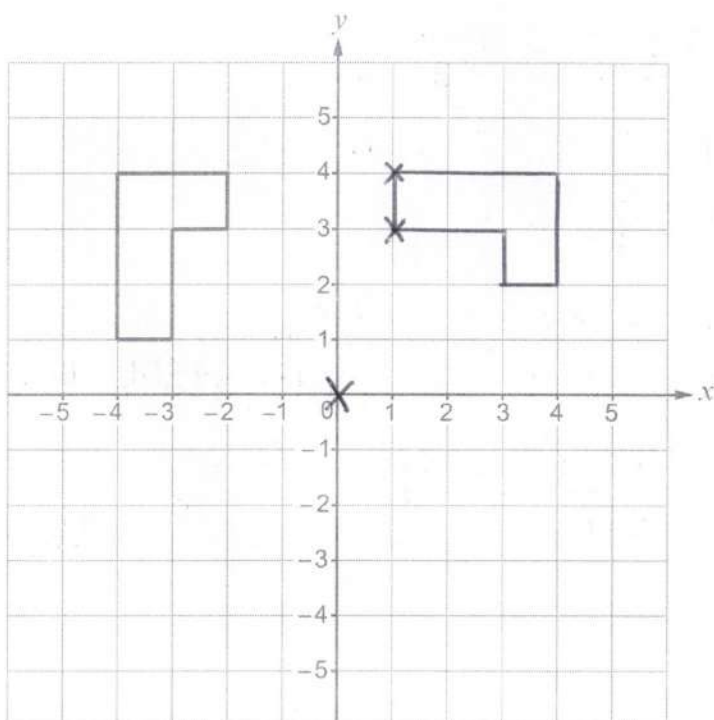
$\rightarrow 3$ $\downarrow 4$

[2]

Examiner
only.

- (b) Rotate this shape 90° clockwise about the point $(0,0)$.

[2]



18.

Use:

$$\text{Pressure} = \frac{\text{Force (N)}}{\text{Area (cm}^2\text{)}}$$



The base of a filing cabinet is a rectangle. It measures 45 cm by 60 cm.
The whole of the base is in contact with the horizontal ground.

$$45 \times 60 = 2700$$

- (a) The empty filing cabinet exerts a force of 675 N on the ground.

What is the pressure exerted on the ground by the empty filing cabinet?
Give your answer in N/cm^2 .

[2]

$$P = \frac{675}{2700} = 0.25 \text{ N/cm}^2$$

- (b) When the filing cabinet is full, the pressure it exerts on the ground is 0.75 N/cm^2 .

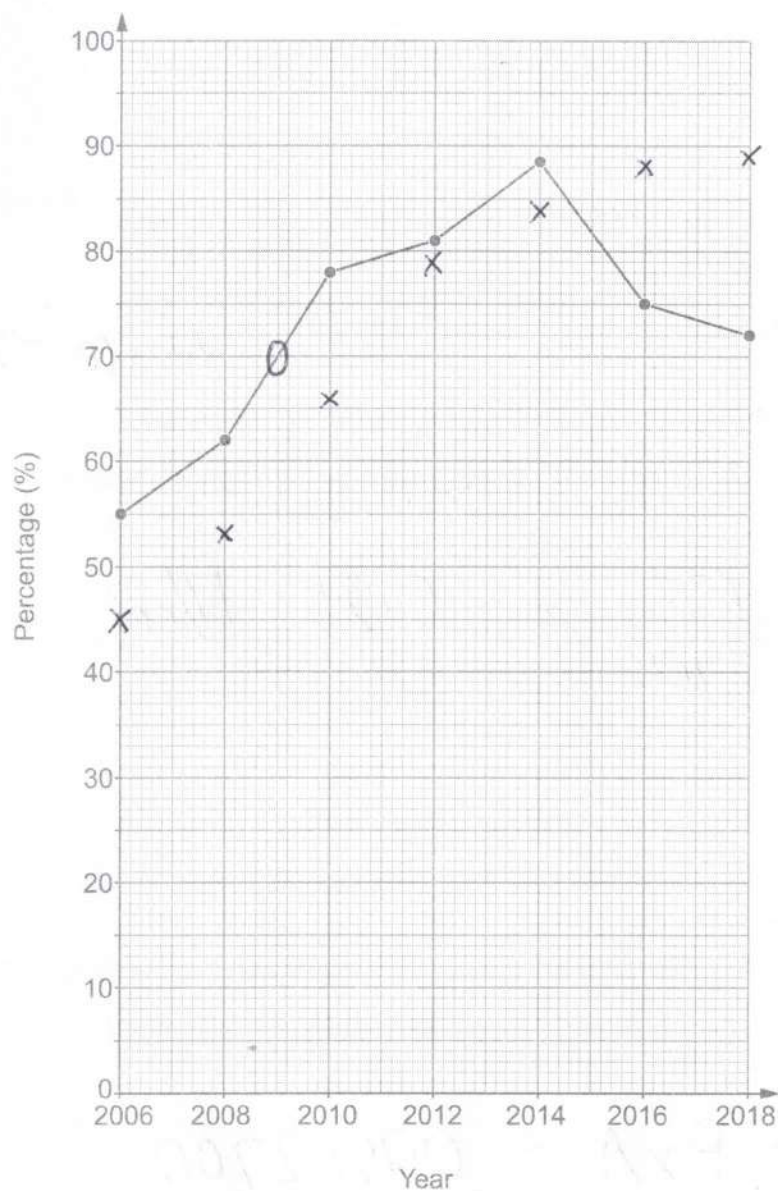
What is the force that the full filing cabinet exerts on the ground?
Give your answer in newtons (N).

[2]

$$F = P \times A = 0.75 \times 2700 \\ = 2025 \text{ N}$$



19. The diagram shows information about the percentage of households in Eduvale that owned a desktop computer for the even-numbered years from 2006 to 2018.



- (a) (i) Complete this statement.

[1]

The percentage of households that owned a desktop computer decreased the most between the even-numbered years 2014 and 2016.



(ii) Jane says,

"The graph shows that 70% of people owned a desktop computer in 2009 because it passes through that point."

Is Jane correct?

Yes

☐

No

☒

Explain how you decide.

Graph shows households, Jane says people [1]

(b) The table shows information about the percentage of households in Eduvale that had an internet connection for the even-numbered years from 2006 to 2018.

Year	2006	2008	2010	2012	2014	2016	2018
Internet connection (%)	45	53	66	79	84	88	89

(i) On the diagram on page 24, plot the information for internet connection. ✓ [1]

(ii) In which even-numbered year was the difference in the percentage of households in Eduvale owning a desktop computer and the percentage of households having an internet connection the greatest? [1]

2018

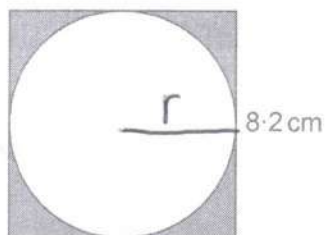
(iii) Eduvale is a large town in a county.

Comment on how, in this **county**, the percentage of households owning a desktop computer and the percentage of households having an internet connection are likely to have changed in this time period. [1]

Desktop ownership climbs until 2014
then falls. % with internet keeps increasing.



20. (a) The diagram shows a circle inside a square of side 8.2 cm.



radius = 4.1

Diagram not drawn to scale

The sides of the square are tangents to the circle.

Find the area of the shaded region.
You must show all your working.

[4]

$$8.2^2 - \pi \times 4.1^2$$

$$= 14.42...$$

$$= 14.4$$



- (b) The diagram shows a parallelogram.
It is the cross-section of a prism.

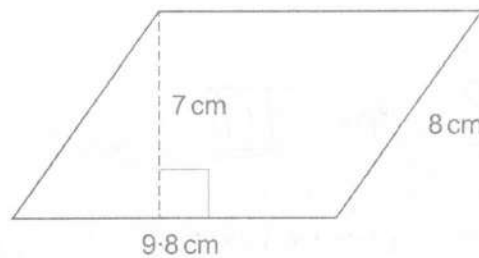


Diagram not drawn to scale

The length of the prism is 16 cm.
Find the volume of the prism.

[3]

$$V = 9.8 \times 7 \times 16$$

$$= 1097.6 \text{ cm}^3$$



21. (a) Solve
- $7x - 5 = 2x + 3$
- .

[2]

$$5x = 8$$

$$x = \frac{8}{5} \quad \text{or} \quad \underline{\underline{1.6}}$$

- (b) Roza is buying bananas and apples.

She buys x bananas which cost 30 pence each.

She buys 2 more apples than the number of bananas she buys.

Her apples cost 25 pence each.

She pays a total of £5.45. $= 545$

$$x+2$$

Use an algebraic method to find the number of bananas Roza buys.

[4]

$$30x + 25(x+2) = 545$$

$$30x + 25x + 50 = 545$$

$$55x = 495$$

$$x = \underline{\underline{9}}$$

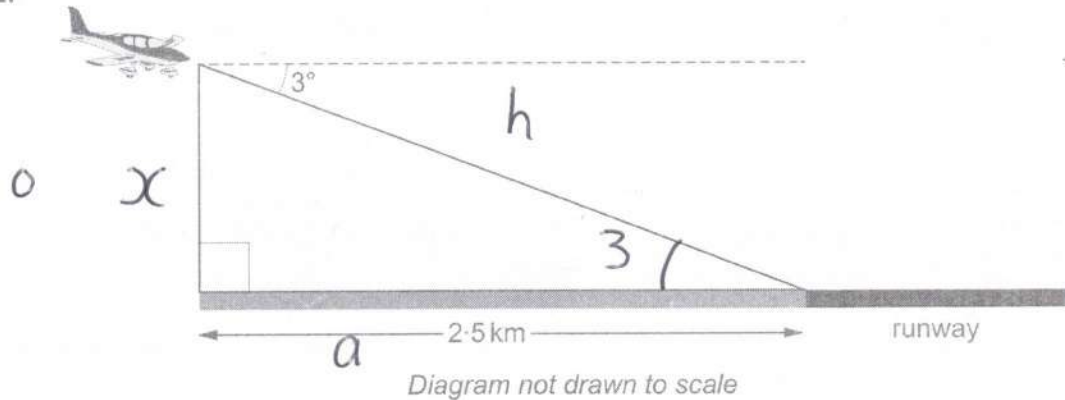
- (c) Factorise
- $x^2 + 5x + 4$
- .

[2]

$$(x+4)(x+1)$$



22.



An aircraft is making its final approach ready to land.

The aircraft is:

- flying at 3° to the horizontal,
- 2.5 km horizontally from the start of the runway, as shown on the diagram above.

Calculate the vertical height of the aircraft above the horizontal ground.
You must show all your working.

[4]

TA

$$x = \tan 3^\circ \times 2.5$$

$$= 0.1310...$$

$$= 0.13 \text{ km}$$



23. Heath has £3000 to invest for five years.
No extra money will be paid in or withdrawn during these five years.
He is going to choose one of these accounts.

Account A
4% compound interest per year
Interest rates can vary

Account B
Guaranteed interest at the end of
5 years of £190 for
each £1000 invested

- (a) Which account gives Heath the greater **percentage increase** in his money at the end of 5 years and by how much is it greater?

Show how you decide. State any assumption that you make.

[6]

$$\textcircled{A} \quad 3000 \times 1.04^5 = 3649.958$$

$$\textcircled{B} \quad 190 \times 3 = 570$$

$$\textcircled{A} \quad \frac{3649.96 - 3000}{3000} \times 100 = 21.7\%$$

$$\textcircled{B} \quad \frac{570}{3000} \times 100 = 19\%$$

Account A gives the greater percentage increase by 2.7 %

Assumption Account A interest rate stays the same

- (b) Comment on the effect that your assumption in part (a) has had on your decision. [1]

If the rate increased A would still be better but by more.

