

Write your name here

Surname

Other names

Pearson Edexcel
International GCSE

Centre Number

--	--	--	--	--

Candidate Number

--	--	--	--

Mathematics A

Level 1/2
Paper 2HR



Higher Tier

Thursday 7 June 2018 – Morning
Time: 2 hours

Paper Reference

4MA1/2HR

You must have:

Ruler graduated in centimetres and millimetres, protractor, compasses, pen, HB pencil, eraser, calculator. Tracing paper may be used.

Total Marks

Instructions

- Use **black** ink or ball-point pen.
- **Fill in the boxes** at the top of this page with your name, centre number and candidate number.
- Answer **all** questions.
- Without sufficient working, correct answers may be awarded no marks.
- Answer the questions in the spaces provided
– *there may be more space than you need.*
- **Calculators may be used.**
- You must **NOT** write anything on the formulae page.
Anything you write on the formulae page will gain NO credit.

Information

- The total mark for this paper is 100.
- The marks for **each** question are shown in brackets
– *use this as a guide as to how much time to spend on each question.*

Advice

- Read each question carefully before you start to answer it.
- Check your answers if you have time at the end.

Turn over ►

P59014A

©2018 Pearson Education Ltd.

1/1/1/



P 5 9 0 1 4 A 0 1 2 4



Pearson

International GCSE Mathematics

Formulae sheet – Higher Tier

Arithmetic series

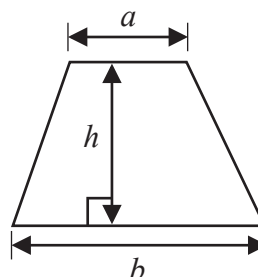
Sum to n terms, $S_n = \frac{n}{2} [2a + (n-1)d]$

The quadratic equation

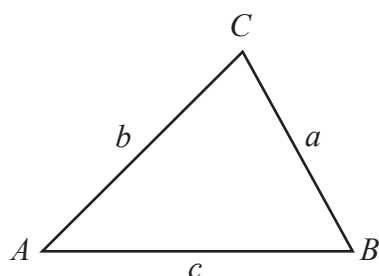
The solutions of $ax^2 + bx + c = 0$ where $a \neq 0$ are given by:

$$x = \frac{-b \pm \sqrt{b^2 - 4ac}}{2a}$$

$$\text{Area of trapezium} = \frac{1}{2}(a+b)h$$



Trigonometry



In any triangle ABC

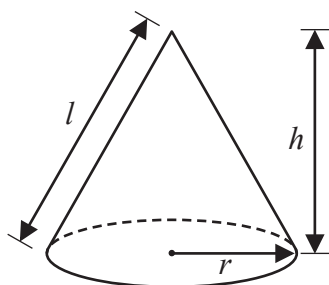
$$\text{Sine Rule} \quad \frac{a}{\sin A} = \frac{b}{\sin B} = \frac{c}{\sin C}$$

$$\text{Cosine Rule} \quad a^2 = b^2 + c^2 - 2bc \cos A$$

$$\text{Area of triangle} = \frac{1}{2}ab \sin C$$

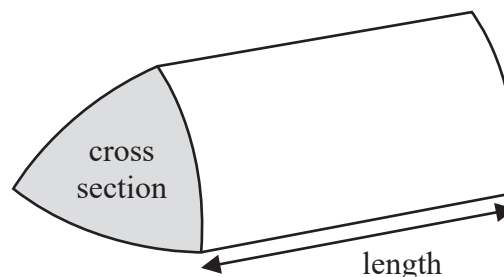
$$\text{Volume of cone} = \frac{1}{3}\pi r^2 h$$

$$\text{Curved surface area of cone} = \pi r l$$



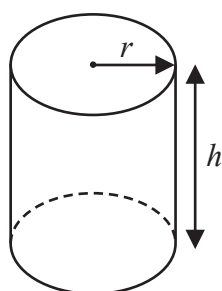
Volume of prism

= area of cross section \times length



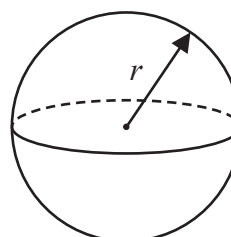
$$\text{Volume of cylinder} = \pi r^2 h$$

$$\text{Curved surface area of cylinder} = 2\pi r h$$



$$\text{Volume of sphere} = \frac{4}{3}\pi r^3$$

$$\text{Surface area of sphere} = 4\pi r^2$$



DO NOT WRITE IN THIS AREA

DO NOT WRITE IN THIS AREA

DO NOT WRITE IN THIS AREA



Answer ALL TWENTY FOUR questions.

Write your answers in the spaces provided.

You must write down all the stages in your working.

- 1 x , 10 and y are three integers written in order of size, starting with the smallest integer.

The mean of x , 10 and y is 11

The range of x , 10 and y is 7

Work out the value of x and the value of y .

$x =$

$y =$

(Total for Question 1 is 2 marks)

$$\text{pressure} = \frac{\text{force}}{\text{area}}$$

- 2 A box is put on a table.

The face of the box in contact with the table is in the shape of a rectangle, 2 m by 1.25 m.

The pressure on the table due to the box is 42 newtons/m²

Work out the force exerted by the box on the table.

..... newtons

(Total for Question 2 is 3 marks)



3 Behnaz makes candles.

She has 6.3 kilograms of wax and uses it all to make candles.

Each candle Behnaz makes uses 210 grams of wax.

Behnaz sells $\frac{2}{5}$ of the candles for \$13 each.

She then reduces this price by 20% and sells the rest of the candles.

Work out the total amount of money Behnaz gets by selling all the candles she made.

\$.....

(Total for Question 3 is 4 marks)



- 4 (a) Expand and simplify $3(c - 7) + 2(3c + 4)$

.....
(2)

- (b) Expand and simplify $(x + 7)(x - 2)$

.....
(2)

- (c) Factorise fully $28y^2 - 21y$

.....
(2)

- (d) Solve $\frac{7x - 2}{4} = 3x + 1$

Show clear algebraic working.

$x =$
(3)

(Total for Question 4 is 9 marks)



- 5 Abelle flew by plane from Dubai to Rome.

The flight time was 6 hours 42 minutes.

The average speed of the plane was 650 kilometres per hour.

Work out the distance the plane flew.

.....kilometres

(Total for Question 5 is 3 marks)

- 6 Hiran invests 20 000 rupees in an account for 3 years at 1.5% per year compound interest.

Work out the total amount of money in the account at the end of 3 years.

Give your answer to the nearest rupee.

.....rupees

(Total for Question 6 is 3 marks)



7 (a) Simplify fully $\frac{20x^2y^6}{4x^2y^2}$

.....
(2)

(b) Make e the subject of the formula $h = 3e + f$

.....
(2)

(Total for Question 7 is 4 marks)

- 8 From point A , Stanley walks 200 m due east to point B .
From B , he then walks 160 m due south to point C .

Work out the length of AC .

Give your answer correct to 3 significant figures.

.....metres

(Total for Question 8 is 3 marks)



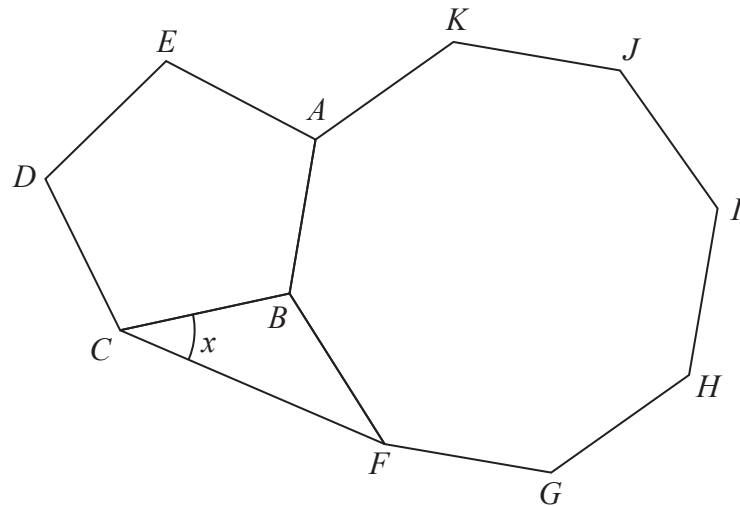


Diagram **NOT**
accurately drawn

The diagram shows a regular pentagon, $ABCDE$, a regular octagon, $ABFGHIJK$, and an isosceles triangle, BCF .

Work out the size of angle x .

(Total for Question 9 is 4 marks)



10 $ABCD$ is a trapezium.

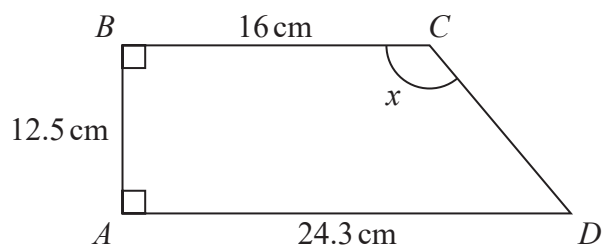


Diagram **NOT**
accurately drawn

Work out the size of angle x .

Give your answer correct to 1 decimal place.

(Total for Question 10 is 4 marks)



- 11 The table shows information about the amount of money spent on holiday by each of 120 families.

Money spent (£ m)	Frequency
$0 < m \leq 100$	10
$100 < m \leq 200$	36
$200 < m \leq 300$	34
$300 < m \leq 400$	20
$400 < m \leq 500$	15
$500 < m \leq 600$	5

- (a) Write down the modal class.

.....
(1)

- (b) Complete the cumulative frequency table for the information in the table.

Money spent (£ m)	Cumulative frequency
$0 < m \leq 100$	
$0 < m \leq 200$	
$0 < m \leq 300$	
$0 < m \leq 400$	
$0 < m \leq 500$	
$0 < m \leq 600$	

(1)



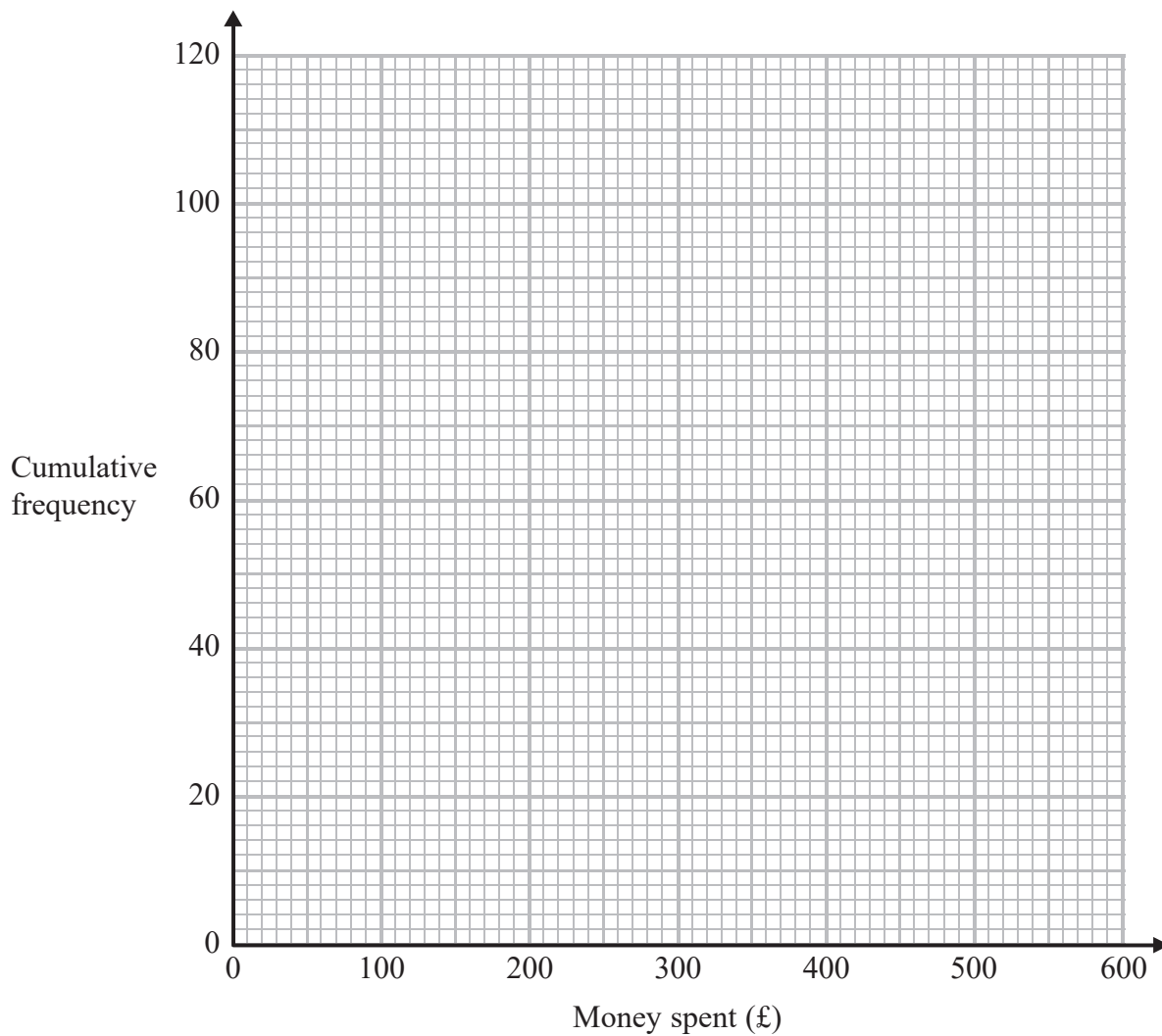
DO NOT WRITE IN THIS AREA

DO NOT WRITE IN THIS AREA

DO NOT WRITE IN THIS AREA

(c) On the grid, draw a cumulative frequency graph for your table.

(2)



(d) Use your graph to find an estimate for the interquartile range.

£.....

(2)

(e) Use your graph to find an estimate for the number of families that spent more than £450 on holiday.

(2)

(Total for Question 11 is 8 marks)



P 5 9 0 1 4 A 0 1 1 2 4

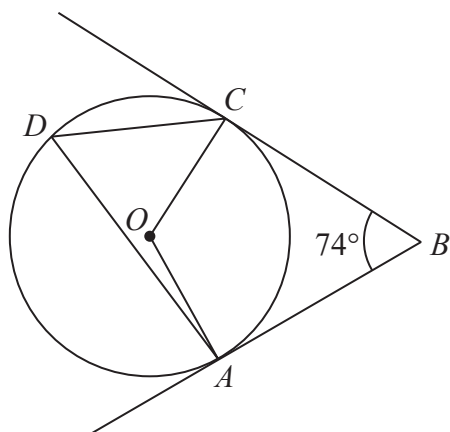


Diagram **NOT**
accurately drawn

A , C and D are points on a circle, centre O .
 AB and CB are tangents to the circle.

Angle $ABC = 74^\circ$

Work out the size of angle ADC .
Show your working clearly.

(Total for Question 12 is 3 marks)



- 13 The straight line L_1 has equation $y = 6 - 2x$
The straight line L_2 is perpendicular to L_1 and passes through the point $(4, 7)$
Find the coordinates of the point where the line L_2 crosses the x -axis.

(.....,))

(Total for Question 13 is 4 marks)

- 14 $128 = 4^{2x} \times 2^x$

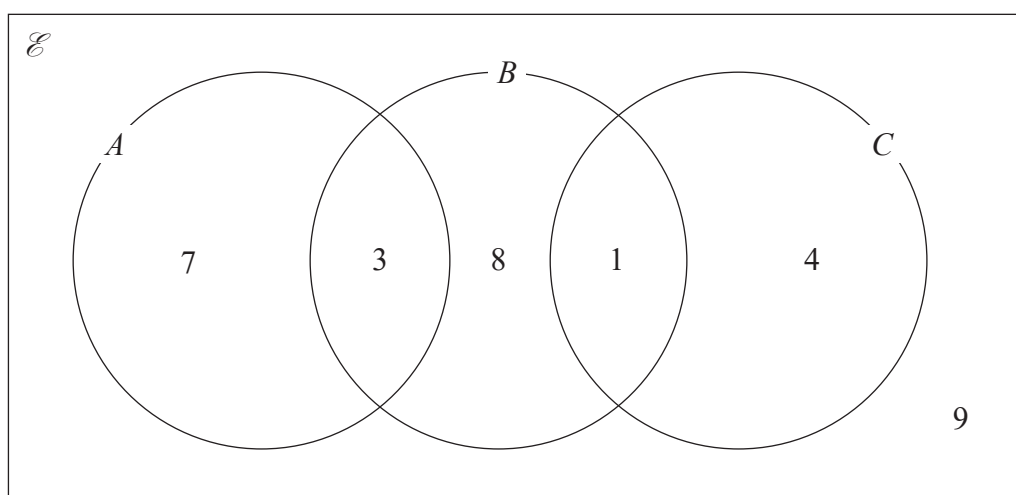
Work out the value of x .

$x =$

(Total for Question 14 is 3 marks)



15 The Venn diagram shows a universal set, \mathcal{E} , and sets A , B and C .



7, 3, 8, 1, 4 and 9 represent the **numbers** of elements.

Find

(i) $n(A \cup B)$

.....

(ii) $n(A' \cap C)$

.....

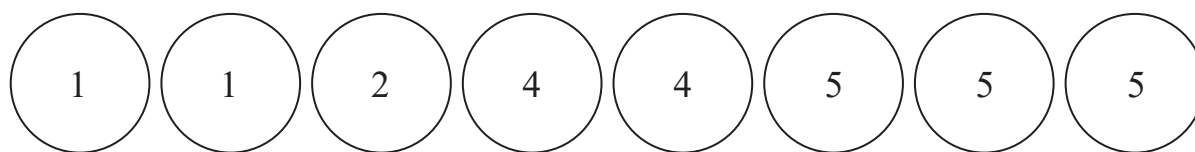
(iii) $n(A' \cup B')$

.....

(Total for Question 15 is 3 marks)



- 16 There are 8 counters in a bag.
There is a number on each counter.



Fiona takes at random **three** of the counters.
She adds the numbers on the **three** counters to get her total.

Work out the probability that her total is an odd number.

(Total for Question 16 is 4 marks)



17 (a) Use algebra to show that $0.4\dot{3}\dot{6} = \frac{24}{55}$

(2)

(b) Show that $\frac{\sqrt{20} + \sqrt{80}}{\sqrt{3}}$ can be expressed in the form \sqrt{a} where a is an integer.

Show your working clearly.

(3)

(Total for Question 17 is 5 marks)



18 Solve the simultaneous equations

$$2x^2 + 3y^2 = 14$$

$$x = 2y - 3$$

Show clear algebraic working.

(Total for Question 18 is 5 marks)



19 $a = \frac{p - q}{t}$

$p = 8.4$ correct to 2 significant figures.

$q = 6.3$ correct to 2 significant figures.

$t = 0.27$ correct to 2 significant figures.

Work out the upper bound for the value of a .

Show your working clearly.

Give your answer correct to 1 decimal place.

(Total for Question 19 is 3 marks)

DO NOT WRITE IN THIS AREA

DO NOT WRITE IN THIS AREA

DO NOT WRITE IN THIS AREA



DO NOT WRITE IN THIS AREA

DO NOT WRITE IN THIS AREA

DO NOT WRITE IN THIS AREA

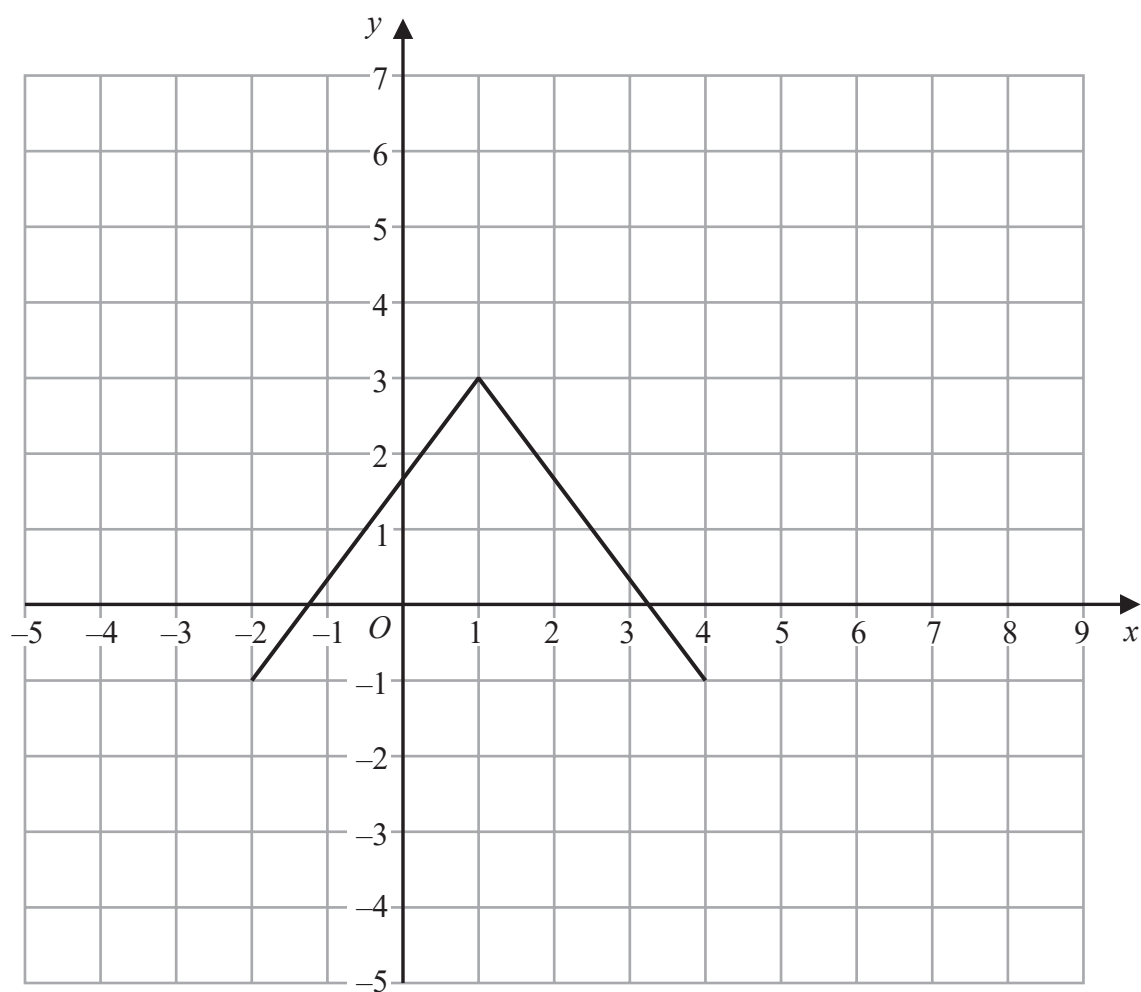
20 Solve the inequality $4x^2 - 5x - 6 > 0$

(Total for Question 20 is 4 marks)



P 5 9 0 1 4 A 0 1 9 2 4

21 Here is the graph of $y = f(x)$



(a) On the grid above, draw the graph of $y = 2f(x)$

(2)

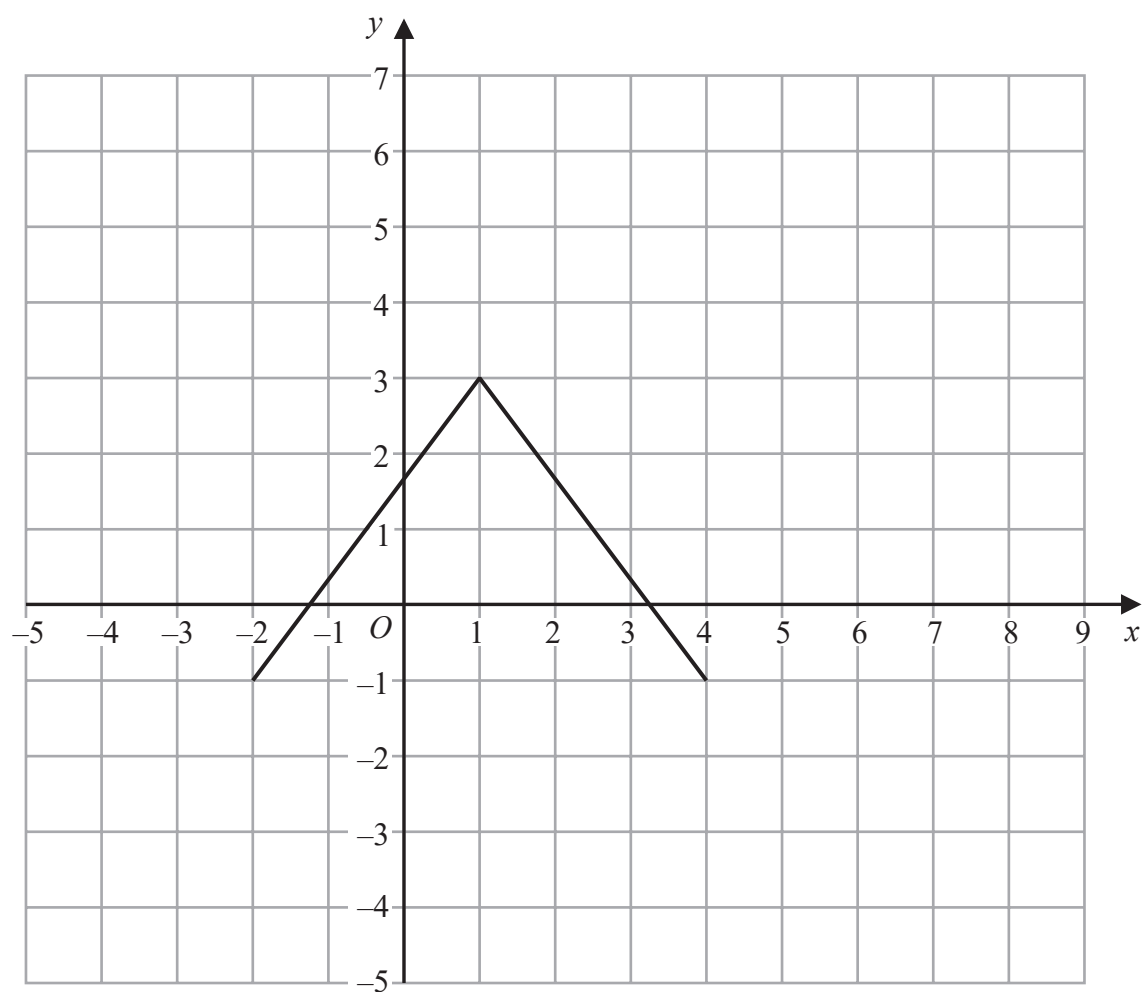


DO NOT WRITE IN THIS AREA

DO NOT WRITE IN THIS AREA

DO NOT WRITE IN THIS AREA

Here is the graph of $y = f(x)$



(b) On the grid above, draw the graph of $y = f(-x)$

(2)

(Total for Question 21 is 4 marks)



22 Express $\frac{4x^2 - 25}{5x^2 + 2x - 7} \times \left(\frac{2}{x-3} - \frac{3}{2x-5} \right)$ as a single fraction in its simplest form.

(Total for Question 22 is 4 marks)



23 OAB is a triangle.

$$\overrightarrow{OA} = \mathbf{a} \quad \overrightarrow{OB} = \mathbf{b}$$

C is the midpoint of OA .

D is the point on AB such that $AD:DB = 3:1$

E is the point such that $\overrightarrow{OB} = 2\overrightarrow{BE}$

Using a vector method, prove that the points C , D and E lie on the same straight line.

(Total for Question 23 is 5 marks)



24 (a) Express $7 - 4x - x^2$ in the form $p - (x + q)^2$ where p and q are constants.

.....
(2)

(b) Use your answer to part (a) to solve the equation $7 - 4(y + 3) - (y + 3)^2 = 0$

Give your solutions in the form $e \pm \sqrt{f}$ where e and f are integers.

.....
(3)

The curve **C** has equation $y = 3 - 5(x + 1)^2$
The point A is the maximum point on **C**.

(c) Write down the coordinates of A .

(.....,)
(1)

(Total for Question 24 is 6 marks)

TOTAL FOR PAPER IS 100 MARKS

